



**GCE AS/A level**

1202/01

**GEOGRAPHY – G2**  
**Changing Human Environments**

P.M. FRIDAY, 16 May 2014

1 hour 30 minutes

### **ADDITIONAL MATERIALS**

In addition to this examination paper, you will need **one** 12 page answer book.

### **INSTRUCTIONS TO CANDIDATES**

Use black ink or black ball-point pen.

Answer **all** questions.

Write your answers in the separate answer book provided.

Write your name, centre number and candidate number in the spaces at the top of the answer book.

### **INFORMATION FOR CANDIDATES**

Each question carries **25** marks.

The number of marks is given in brackets at the end of each question or part-question.

You are reminded that assessment will take into account the quality of written communication used in your answers.

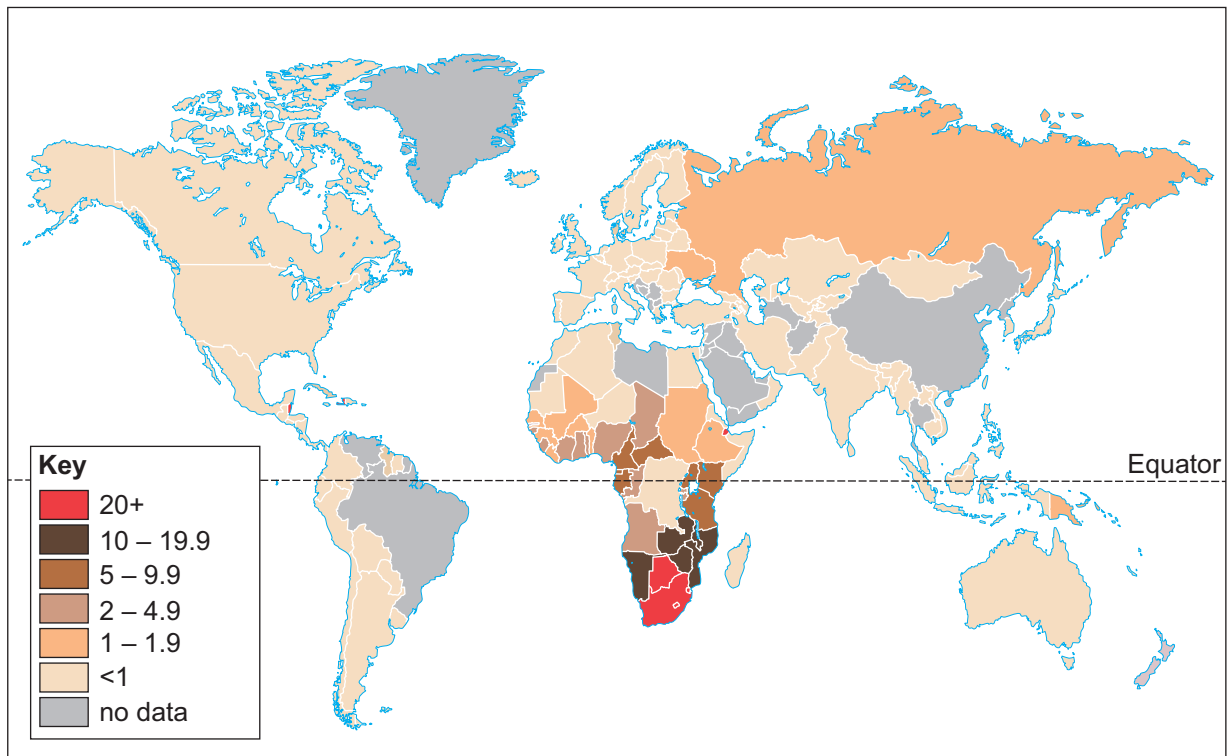
**THIS PAPER REQUIRES THAT YOU MAKE THE FULLEST POSSIBLE USE OF APPROPRIATE EXAMPLES IN SUPPORT OF YOUR ANSWERS. SKETCH-MAPS AND DIAGRAMS SHOULD BE INCLUDED WHERE RELEVANT.**

**G2 – CHANGING HUMAN ENVIRONMENTS**

*Answer all questions.*

*Make the fullest possible use of examples in support of your answers.*

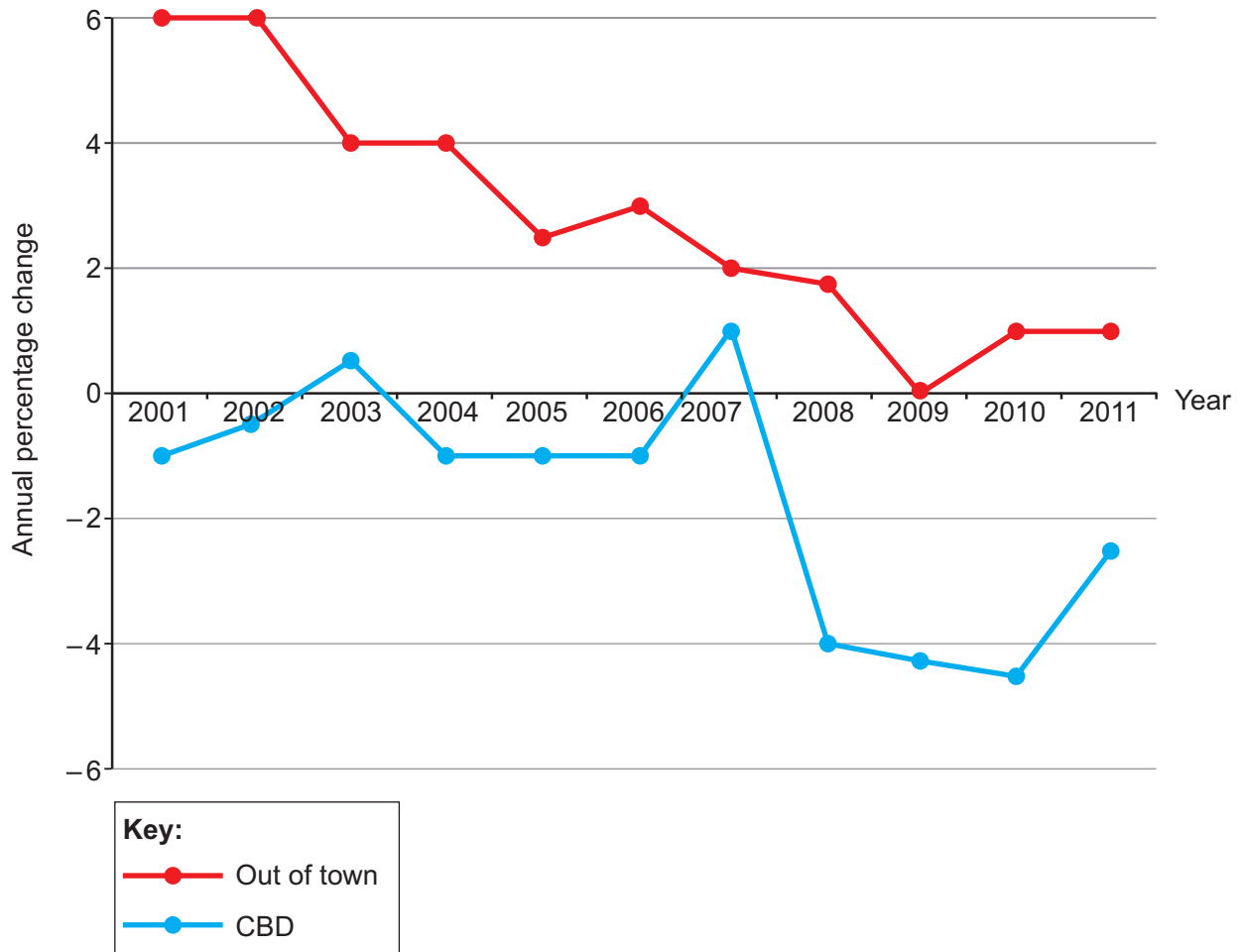
**Figure 1: Percentage of women aged 15–49 with HIV**



**POPULATION REFERENCE BUREAU**  
 Washington, DC  
[www.prb.org](http://www.prb.org)

*Source: 2012 world-population-data-sheet*

1. (a) Use **Figure 1** to describe the global pattern of the percentage of women aged 15–49 with HIV. [5]
- (b) Outline some consequences of high mortality rates. [10]
- (c) Contrast the characteristics of **two** types of migration. [10]

**Figure 2: Annual percentage change in retail space in use in the UK, 2001-2011**

Source: adapted from *The Portas Review*  
*An independent review into the future of our high streets, December 2011*

2. (a) Use **Figure 2** to describe changes in retail space in use in the UK. [5]
- (b) Outline the impacts of changes in the rural-urban fringe. [10]
- (c) Explain why different groups of people live in different areas within settlements. [10]

Figures 3a and 3b: Showing land use in a part of a city in England



RGB Aerial Photography © GeoPerspectives

Figure 3a

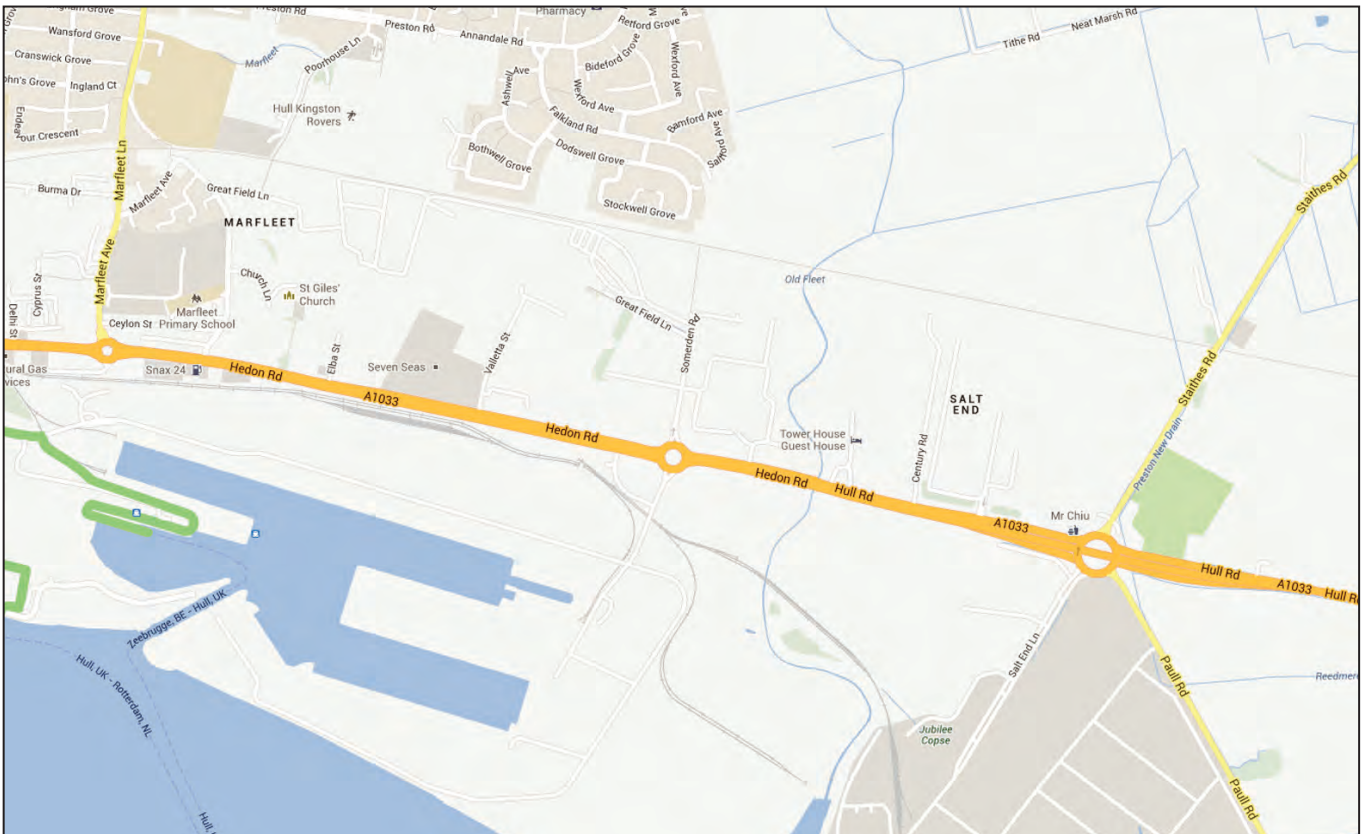
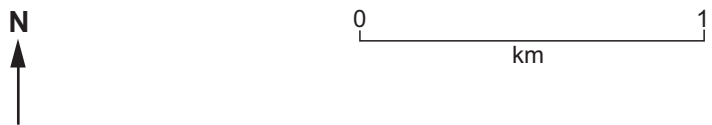


Figure 3b

3. (a) Use **Figures 3a and 3b** to describe the advantages of interpreting land use from the aerial photograph rather than from the map. [7]
- (b) Outline how a questionnaire survey may be undertaken in an investigation within the area shown in **Figure 3a**. [8]
- (c) Outline the conclusions of your investigation into a changing human environment.  
*You should state clearly the question that you have investigated.* [10]

**END OF PAPER**